



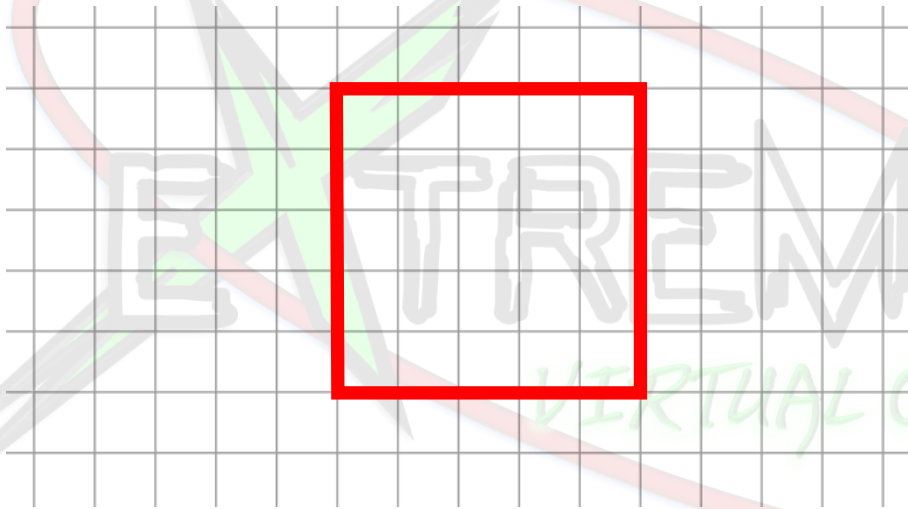
# Practice Questions

Grade 7

*you must do this question in one of two ways:*

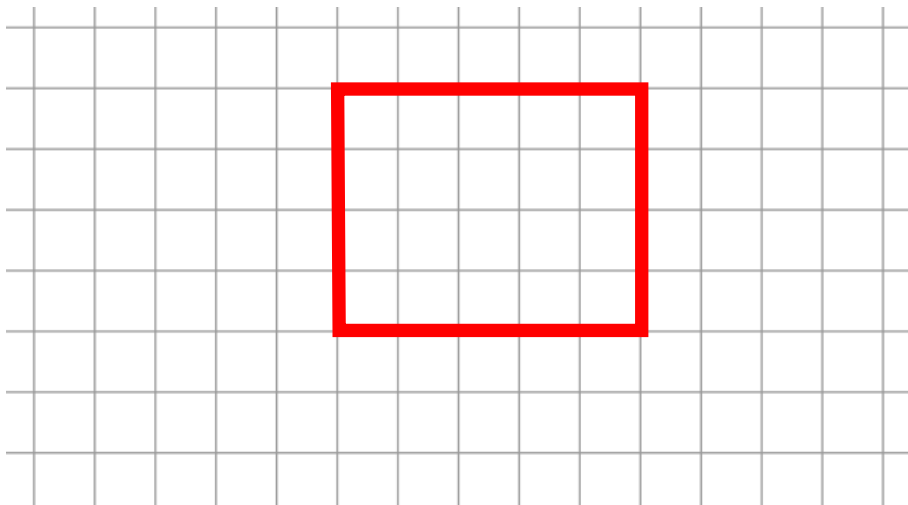
- 1) if you do not know what to do, discuss it with me on the group*
- 2) if you have indeed completed it, or tried to do it, post a photo on the group.*

Draw a figure that has a perimeter of 20cm



Figures such as these clearly indicate the difference between perimeter and area

Draw a figure that has an area of 20cm<sup>2</sup>






# Practice Questions

Grade 7

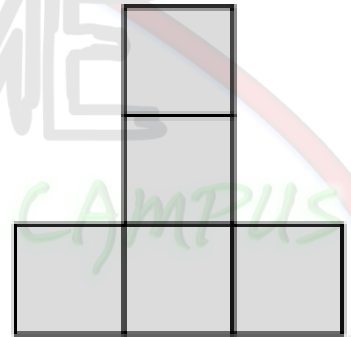
*you must do this question in one of two ways:*

- 1) if you do not know what to do, discuss it with me on the group*
- 2) if you have indeed completed it, or tried to do it, post a photo on the group.*

Determine the area and perimeter of these two shapes



Perimeter: 16  
Area: 7



Perimeter: 12  
Area: 5

